



MADHAV INTERNATIONAL SCHOOL

Affiliated to the Council for Indian School Certificate Examinations (CISCE) - GU031/2014
Pranaminagar, Vastral, Ahmedabad-382418, Gujarat
Ph. +91-079-29292753 | Email: admin@madhavinternationalschool.org

Worksheet-(2016-17)

GRADE -4 (Computer)

NAME: _____

Date: _____

Roll No: _____

Q1 Write a LOGO command to draw a following figures :

1		2	
3		4	
5		6	
7		8	
9		10	

Q2 Answer the following questions.

1. Write down the advantages of Procedures.

2. Write down the Rules for Naming a Procedure.

3. Explain the Parts of LOGO Procedure with the help of diagram

Diagram :





MADHAV INTERNATIONAL SCHOOL

Affiliated to the Council for Indian School Certificate Examinations (CISCE) - GU031/2014
Pranaminagar, Vastral, Ahmedabad-382418, Gujarat
Ph. +91-079-29292753 | Email: admin@madhavinternationalschool.org

Diwali Assignment

GRADE -4(English paper-1)

NAME: _____

Date: 08/10/2016

Roll No: _____

[A] See the picture and 10 lines about it



[B] See the picture and 10 lines about it





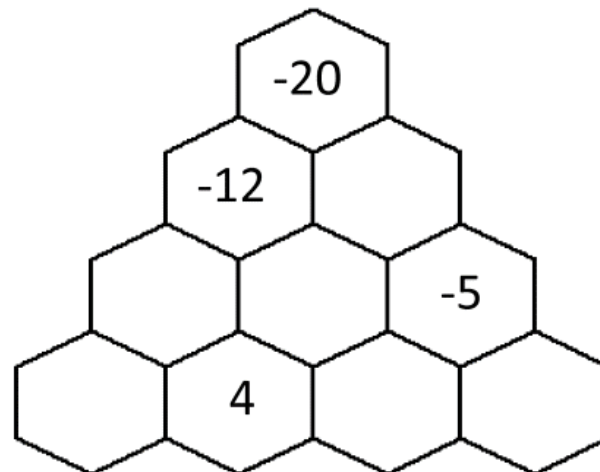
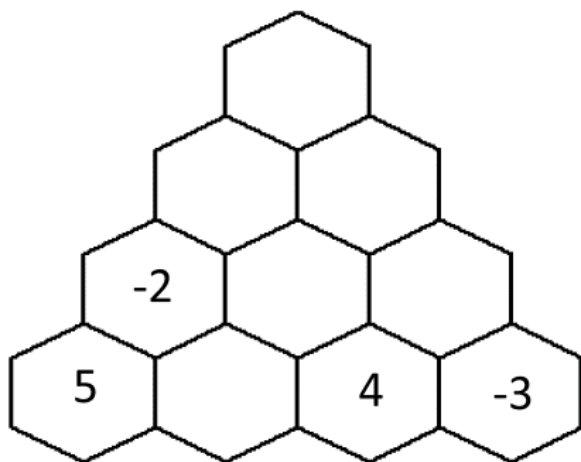
MADHAV INTERNATIONAL SCHOOL

Affiliated to the Council for Indian School Certificate Examinations (CISCE) - GU031/2014
Pranaminagar, Vastral, Ahmedabad-382418, Gujarat
Ph. +91-079-29292753 | Email: admin@madhavinternationalschool.org

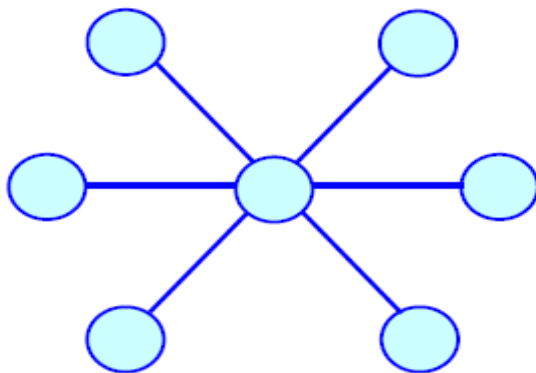
Name : _____ Worksheet (Mathematics)
Roll No : _____ (Grade : 4)

1)

Each hexagon is made by adding up the numbers in the two hexagons below it. Fill in the missing numbers in these puzzles.



2)



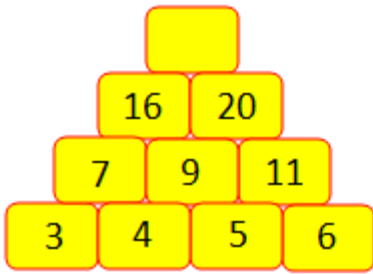
Put the numbers

1, 2, 3, 4, 5, 6 and 7

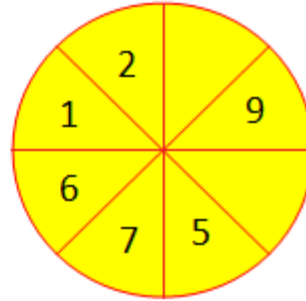
in the circles so that each straight line of three numbers adds up to the same total.

3) Recognize the pattern and find the missing numbers in the small squares.

(i)



(ii)

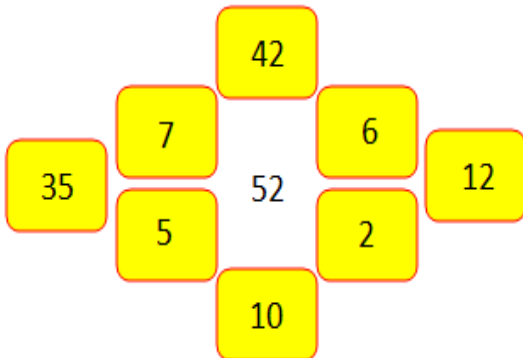


(iii)

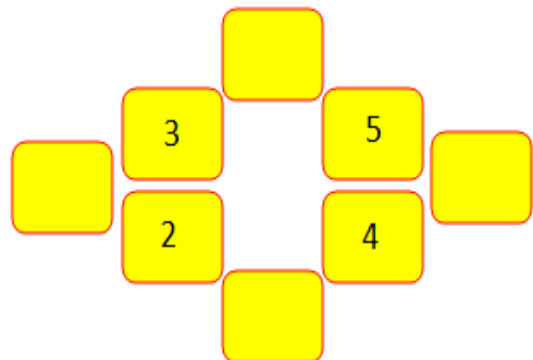


4) Recognize the pattern and find the missing numbers

(i)



(ii)





MADHAV INTERNATIONAL SCHOOL

Affiliated to the Council for Indian School Certificate Examinations (CISCE) - GU031/2014
Pranaminagar, Vastral, Ahmedabad-382418, Gujarat
Ph. +91-079-29292753 | Email: admin@madhavinternationalschool.org

DIWALI VACATION

Grade-4

Science assignment

NAME: _____

Roll No: _____

Date: 08/11/2016

Q.1 Draw any four safety signs. Write what they mean.


--	--	--	--

Q.2 fill the details in the table.

	Polar bear	Zebra
Name		
Where it is found		
Adaption for protection		

Q.3 Stick the pictures of digestive and respiratory picture.

Q.4 Solve the puzzle.



Across

2. the place where an animal lives
4. animal that can fly
5. these help a turtle to swim
6. an elephant uses this to reach branches to eat leaves

Down

1. Seasonal movements of birds for food and shelter
2. these help a fish to breathe